

1.Napíš správny počet predznamenaní ku stupniciam

e mol
cis mol
a mol
gis mol


h mol
fis mol
dis mol
ais mol

Napíš stupnicu e mol


e mol 1#- fis

prirodená

harmonická

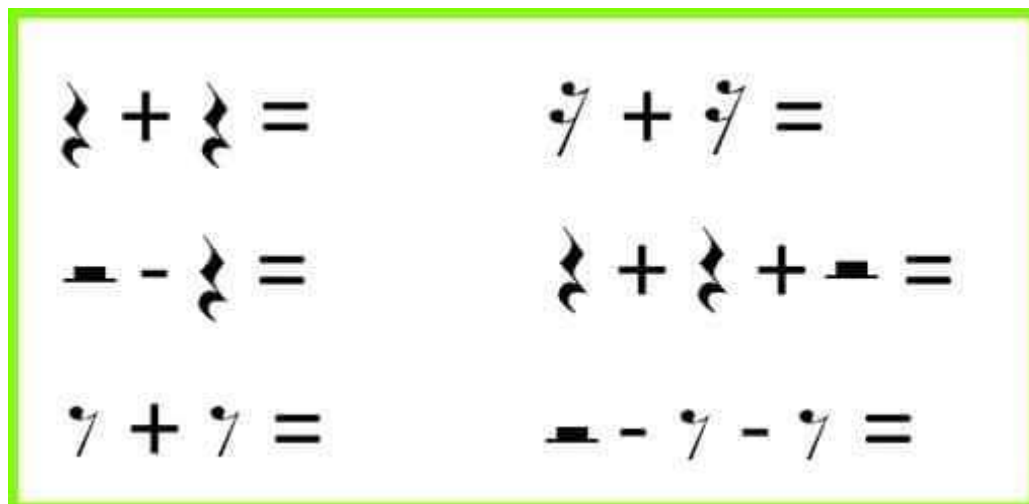


melodická



Prečítaj si v pracovnom zošite na str. 36, 37.

2. Hudobná matematika



Two musical notes with stems and flags (eighths) + =

Two musical notes with stems and flags (eighths) + =

Two musical notes with stems and flags (eighths) - =

Two musical notes with stems and flags (eighths) + =

Two musical notes with stems and flags (eighths) + =

Two musical notes with stems and flags (eighths) - =